


Draw a Picture

Henry has 7 toy cars. He gives 3 toy cars to Bobby. How many toys cars does Henry have left?

$$\underline{\quad} - \underline{\quad} = \underline{\quad}$$

Henry has toy cars left.

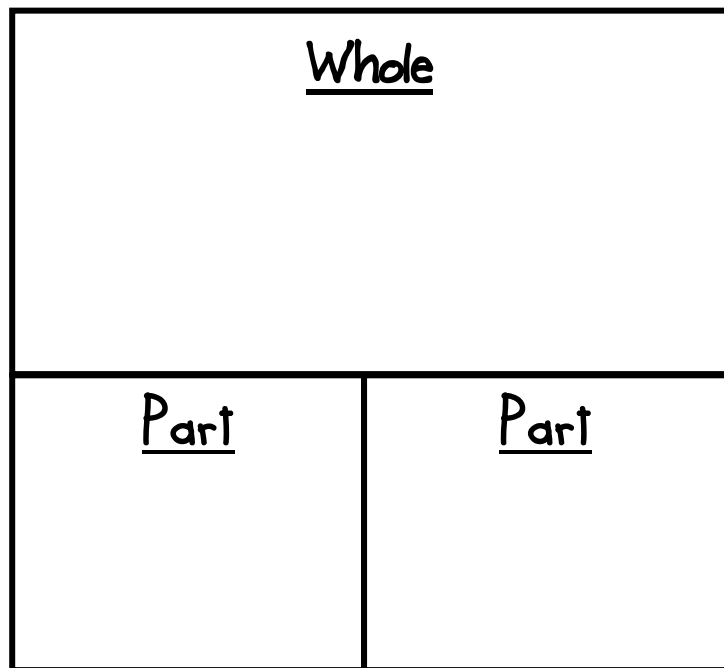
My Little Book of Subtraction Strategies



Name _____

Whole-Part-Part

Kate is going to the park and is bringing 9 friends. 2 of them got sick and couldn't come. How many friends came to the park with Kate?

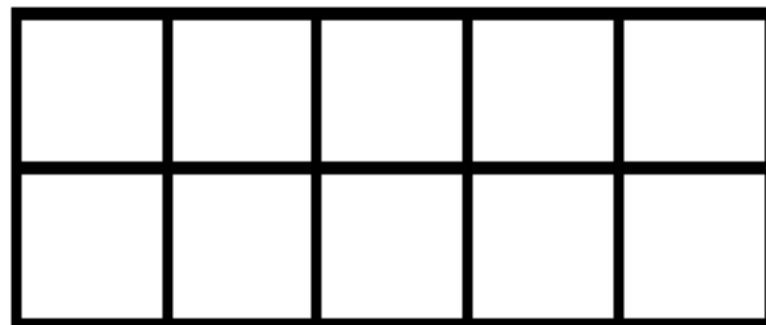


$$\underline{\quad} - \underline{\quad} = \underline{\quad}$$

Kate brought friends to the park.

Ten Frames

Jordan had 10 baseball cards. He gave some to Molly. Now he has 6 baseball cards. How many baseball cards did he give to Molly?

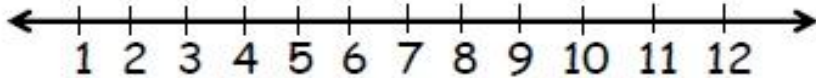


$$\underline{\quad} - \underline{\quad} = \underline{\quad}$$

Molly has baseball cards.

Number Line

Kennedy got 9 pieces of candy from the store. She gave her brother 3 pieces. How many pieces of candy does Kennedy have left?



$$\underline{\quad} - \underline{\quad} = \underline{\quad}$$

Kennedy has pieces of candy.

Fingers

Parker was playing in the dirt and she found 10 little bugs. 5 of them got away. How many bugs did Parker have left?

$$\underline{\quad} - \underline{\quad} = \underline{\quad}$$

Parker has bugs.