




Snow Day 2

MINUTE 100



NAME _____ Teacher _____

1. $81 \div 9 =$

2. $\frac{67}{8} =$

3. A quadrilateral has _____ sides and _____ vertices.

4. 18, _____, 36, _____, 54, _____, 72, 81

5. $\frac{6}{8} = \frac{\quad}{4}$

6. $11 \overline{)121}$

7. The expanded form for 504,200 is _____.


For questions 8–10, round the number to the nearest thousand.

8. 84,375 _____


9. 45,827 _____

10. 62,415 _____

Snow Day 2



Weather Forecast




Today's Date: _____
(Write out the month, date, and year)

Meteorologist: _____
(your name)



Current Temperature: _____
(example: 75°F or 24°C)



Current Weather: _____
(examples: sunny, clear, partly cloudy, rain, windy, snow, etc.)



Wind Direction & Speed: _____
(example: from the northwest at 5 miles per hour)

Today's Weather
(Draw a picture)

Tonight's Weather
(Draw a picture)

Tomorrow's Weather
(Draw a picture)

Today's High Temp: _____
Chance of Precipitation: _____ %

Tonight's Low Temp: _____
Chance of Precipitation: _____ %

Tomorrow's High Temp: _____
Chance of Precipitation: _____ %