

Name: _____



First Grade Summer Packet

Dear Parents/Guardians,


We are so excited for your child to join our classes in September! Your child should read for 30 minutes each day. Attached you will find 3 book report pages for them to complete after reading.

This summer they will also greatly benefit from practicing their doubles facts, make ten partners, and story problems. They must also practice their math fluency in adding and subtracting numbers 1-10. This packet of math practice should be completed at home and it should be returned to their new classroom teacher in September.

The First Grade Team

Name: _____ Date: _____

Book Report



Title: _____

Author: _____

Characters

Beginning _____

Setting

Middle _____


What I Learned

End _____

Rating  _____

Name: _____ Date: _____

Book Report



Title: _____

Author: _____

Characters

Beginning _____

Setting

Middle _____


What I Learned

End _____

Rating 

Name: _____ Date: _____

Book Report



Title: _____

Author: _____

Characters

Beginning _____

Setting

Middle _____

What I Learned

End _____


Rating



Week 1

Name _____

Date _____



Number Bond Dash!

Do as many as you can in 90 seconds. Write the number of bonds you finished here:

1.	$\begin{array}{c} \boxed{5} \\ \diagdown \quad \diagup \\ \boxed{4} \quad \boxed{} \end{array}$	2.	$\begin{array}{c} \boxed{5} \\ \diagdown \quad \diagup \\ \boxed{5} \quad \boxed{} \end{array}$	3.	$\begin{array}{c} \boxed{5} \\ \diagdown \quad \diagup \\ \boxed{4} \quad \boxed{} \end{array}$	4.	$\begin{array}{c} \boxed{5} \\ \diagdown \quad \diagup \\ \boxed{3} \quad \boxed{} \end{array}$	5.	$\begin{array}{c} \boxed{5} \\ \diagdown \quad \diagup \\ \boxed{4} \quad \boxed{} \end{array}$
6.	$\begin{array}{c} \boxed{5} \\ \diagdown \quad \diagup \\ \boxed{} \quad \boxed{3} \end{array}$	7.	$\begin{array}{c} \boxed{5} \\ \diagdown \quad \diagup \\ \boxed{} \quad \boxed{2} \end{array}$	8.	$\begin{array}{c} \boxed{5} \\ \diagdown \quad \diagup \\ \boxed{} \quad \boxed{4} \end{array}$	9.	$\begin{array}{c} \boxed{5} \\ \diagdown \quad \diagup \\ \boxed{} \quad \boxed{1} \end{array}$	10.	$\begin{array}{c} \boxed{5} \\ \diagdown \quad \diagup \\ \boxed{} \quad \boxed{2} \end{array}$
11.	$\begin{array}{c} \boxed{5} \\ \diagdown \quad \diagup \\ \boxed{0} \quad \boxed{} \end{array}$	12.	$\begin{array}{c} \boxed{5} \\ \diagdown \quad \diagup \\ \boxed{1} \quad \boxed{} \end{array}$	13.	$\begin{array}{c} \boxed{5} \\ \diagdown \quad \diagup \\ \boxed{2} \quad \boxed{} \end{array}$	14.	$\begin{array}{c} \boxed{5} \\ \diagdown \quad \diagup \\ \boxed{3} \quad \boxed{} \end{array}$	15.	$\begin{array}{c} \boxed{5} \\ \diagdown \quad \diagup \\ \boxed{4} \quad \boxed{} \end{array}$
16.	$\begin{array}{c} \boxed{5} \\ \diagdown \quad \diagup \\ \boxed{} \quad \boxed{5} \end{array}$	17.	$\begin{array}{c} \boxed{5} \\ \diagdown \quad \diagup \\ \boxed{} \quad \boxed{4} \end{array}$	18.	$\begin{array}{c} \boxed{5} \\ \diagdown \quad \diagup \\ \boxed{} \quad \boxed{3} \end{array}$	19.	$\begin{array}{c} \boxed{5} \\ \diagdown \quad \diagup \\ \boxed{} \quad \boxed{2} \end{array}$	20.	$\begin{array}{c} \boxed{5} \\ \diagdown \quad \diagup \\ \boxed{} \quad \boxed{1} \end{array}$
21.	$\begin{array}{c} \boxed{5} \\ \diagdown \quad \diagup \\ \boxed{5} \quad \boxed{} \end{array}$	22.	$\begin{array}{c} \boxed{5} \\ \diagdown \quad \diagup \\ \boxed{0} \quad \boxed{} \end{array}$	23.	$\begin{array}{c} \boxed{5} \\ \diagdown \quad \diagup \\ \boxed{1} \quad \boxed{} \end{array}$	24.	$\begin{array}{c} \boxed{5} \\ \diagdown \quad \diagup \\ \boxed{3} \quad \boxed{} \end{array}$	25.	$\begin{array}{c} \boxed{5} \\ \diagdown \quad \diagup \\ \boxed{2} \quad \boxed{} \end{array}$

number bond dash 5

Name: _____

Date: _____



Icahn Charter Schools

Grade: _____

Kaden has 21 pencils. Sarah has 15 pencils. How many more pencils does Kaden have than Sarah?

Answer: _____

Write a number sentence that matches the work.

Write a number sentence that matches the story.

Name _____

Date _____



Do as many as you can in 90 seconds. Write the number of bonds you finished here:

1.		2.		3.		4.		5.	
6.		7.		8.		9.		10.	
11.		12.		13.		14.		15.	
16.		17.		18.		19.		20.	
21.		22.		23.		24.		25.	

number bond dash 6

Name: _____

Date: _____



Icahn Charter Schools

Grade: _____

Ms. Z had some bracelets. She gave 14 to Ms. Weiss. Now she has 9 bracelets left. How many bracelets did she have to start with?

Answer: _____

Write a number sentence that matches the work.

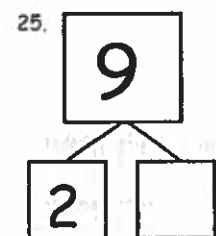
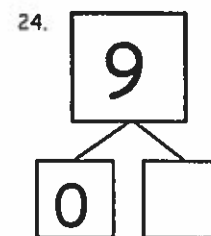
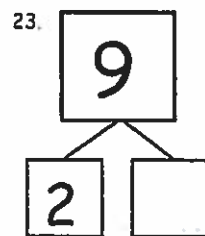
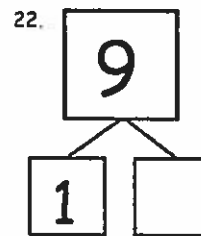
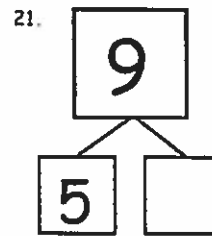
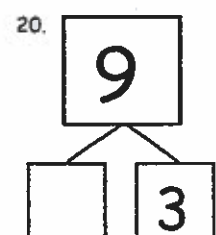
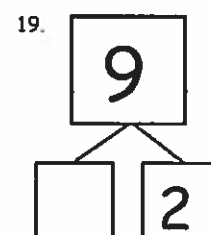
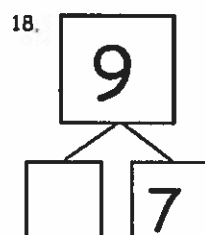
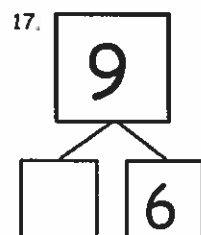
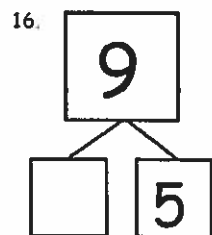
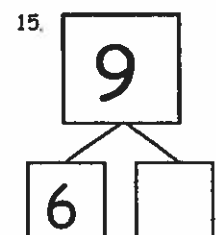
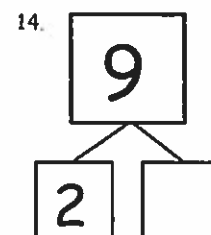
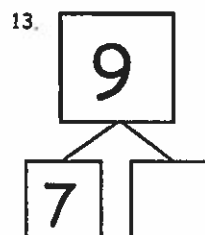
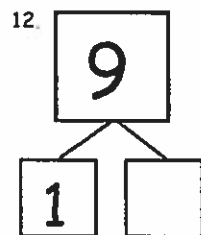
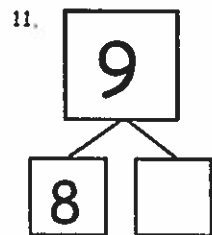
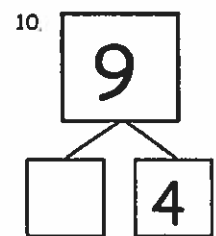
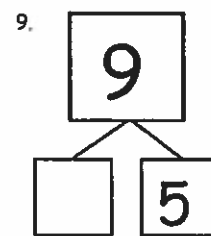
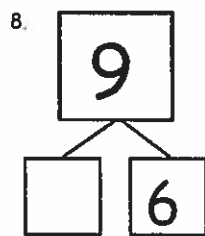

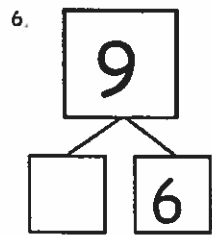
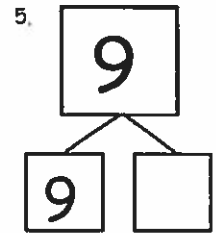
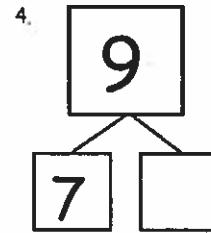
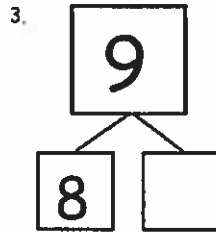

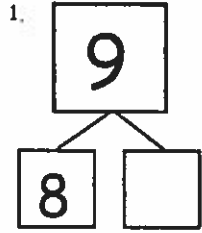
Write a number sentence that matches the story.

Name _____

Date _____



Do as many as you can in 90 seconds. Write the number of bonds you finished here:



number bond dash 9

Name: _____

Date: _____



Icahn Charter Schools

Grade: _____

28 books were in the reading bin. 12 books were chosen by students to read at their table. How many books remain in the reading bin?

Answer: _____

Write a number sentence that matches the work.

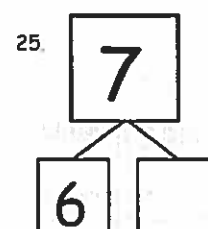
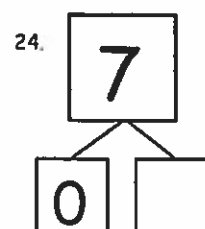
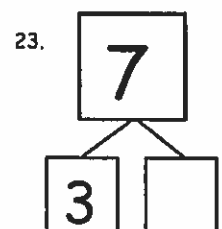
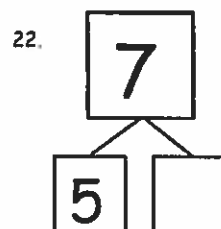
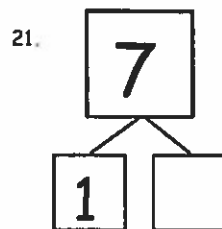
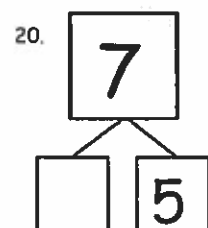
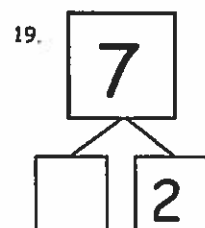
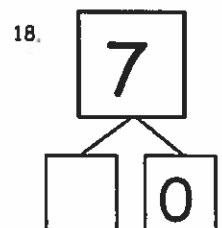
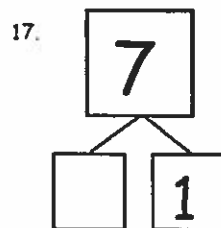
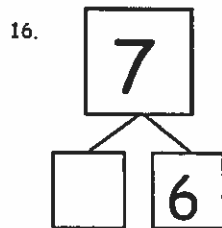
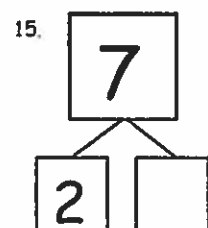
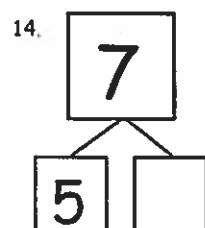
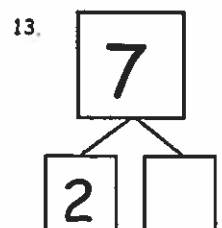
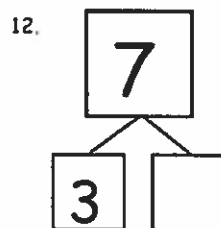
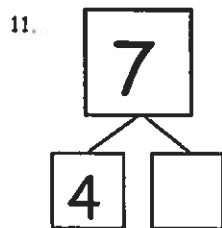
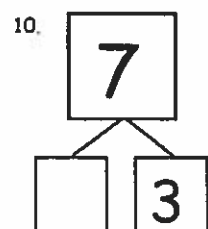
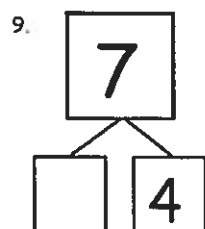
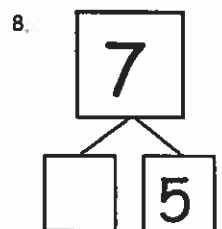
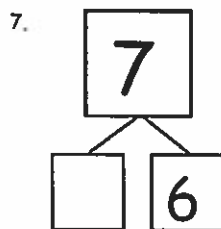
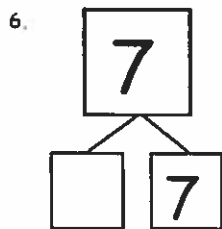
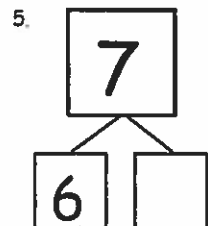
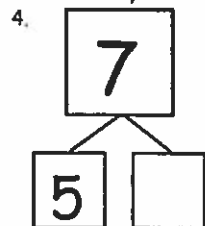
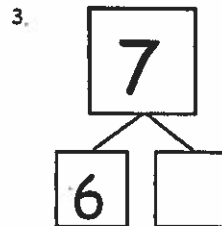
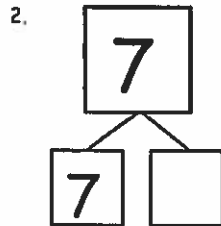
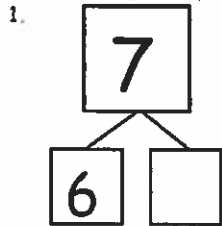
Write a number sentence that matches the story.

Name _____

Date _____



Do as many as you can in 90 seconds. Write the number of bonds you finished here:



number bond dash 7

Name: _____

Date: _____



Icahn Charter Schools

Grade: _____

For lunch, Sophia ate 22 peas. Skyler ate 17 peas. How many more peas did Sophia eat than Skyler?


Answer: _____

Write a number sentence that matches the work.

Write a number sentence that matches the story.

Name _____

Date _____



Do as many as you can in 90 seconds. Write the number of bonds you finished here:

1.	2.	3.	4.	5.
6.	7.	8.	9.	10.
11.	12.	13.	14.	15.
16.	17.	18.	19.	20.
21.	22.	23.	24.	25.

number bond dash 8

Name: _____

Date: _____



Icahn Charter Schools

Grade: _____

I have 16 crayons. I put them into 4 boxes with the same number of crayons in each box. How many crayons fit in each box?


Answer: _____

Write a number sentence that matches the work.

Write a number sentence that matches the story.

A

Number Correct:



Name _____

Date _____

*Write the number of dots. Find 1 or 2 groups that make finding the total number of dots easier!

1.			16.		
2.			17.		
3.			18.		
4.			19.		
5.			20.		
6.			21.		
7.			22.		
8.			23.		
9.			24.		
10.			25.		
11.			26.		
12.			27.		
13.			28.		
14.			29.		
15.			30.		

Name: _____

Date: _____



Icahn Charter Schools

Grade: _____

26 penguins were sliding down the iceberg. 18 penguins went swimming in the ocean. How many penguins are sliding down the icebergs now?

Answer: _____

Write a number sentence that matches the work.

Write a number sentence that matches the story.

A

Number Correct: 

Name _____

Date _____

*Count on to add. Write the number.

1.	$1 + 1$ ● ●		16.	$4 + 3$ ●●●	
2.	$2 + 1$ ●● ●		17.	$5 + 3$ ●●●	
3.	$3 + 1$ ●●● ●		18.	$7 + 3$ ●●●	
4.	$3 + 2$ ●●● ●●		19.	$7 + 2$ ●●	
5.	$1 + 2$ ● ●●		20.	$8 + 2$ ●●	
6.	$2 + 2$ ●● ●●		21.	$6 + 2$ ●●	
7.	$2 + 3$ ●● ●●●		22.	$6 + 1$ ●	
8.	$2 + 1$ ●		23.	$6 + 1$	
9.	$2 + 2$ ●●		24.	$6 + 2$	
10.	$3 + 2$ ●●		25.	$7 + 2$	
11.	$5 + 2$ ●●		26.	$8 + 2$	
12.	$8 + 2$ ●●		27.	$2 + 8$	
13.	$8 + 1$ ●		28.	$2 + 6$	
14.	$7 + 1$ ●		29.	$3 + 6$	
15.	$9 + 1$ ●		30.	$4 + 5$	

Name: _____

Date: _____



Icahn Charter Schools

Grade: _____

16 boys were at the beach. 27 more boys came to join them. How many boys are at the beach now?

Answer: _____

Write a number sentence that matches the work.

Write a number sentence that matches the story.


Adding with pictures, sums to 30

Grade 1 Addition Worksheet

Add the objects and write the sum.

1)  +  =

2)  +  =

3)  +  =

4)  +  =

5)  +  =

6)  +  =

7)  +  =

8)  +  =

9)  +  =

10)  +  =



11)  +  =

12)  +  =

13)  +  =

14)  +  =

15)  +  =

16)  +  =

Name: _____

Date: _____



Icahn Charter Schools

Grade: _____

14 frogs were sitting on the lillipad. 17 more frogs hopped to the log. How many frogs are on the lillipad now?

Answer: _____

Write a number sentence that matches the work.



Write a number sentence that matches the story.

Adding with pictures, sums to 30

Grade 1 Addition Worksheet

Add the objects and write the sum.

1)  +  =

2)  +  =

3)  +  =

4)  +  =

5)  +  =

6)  +  =

7)  +  =

8)  +  =

9)  +  =

10)  +  =

11)  +  =

12)  +  =

13)  +  =

14)  +  =

15)  +  =

16)  +  =

Name: _____

Date: _____



Icahn Charter Schools

Grade: _____

I have 20 munchkins. I put 5 munchkins in each bag. How many bags of munchkins do I have?

Answer: _____

Write a number sentence that matches the work.

Write a number sentence that matches the story.

ANumber Correct: 

Name _____

Date _____

*Count on to add.

1.	$1 + 1$		16.	$4 + 3$	
2.	$2 + 1$		17.	$3 + 3$	
3.	$3 + 1$		18.	$4 + 3$	
4.	$3 + 2$		19.	$3 + 4$	
5.	$2 + 2$		20.	$2 + 4$	
6.	$3 + 2$		21.	$4 + 2$	
7.	$2 + 2$		22.	$5 + 2$	
8.	$3 + 0$		23.	$2 + 5$	
9.	$3 + 1$		24.	$2 + 6$	
10.	$3 + 2$		25.	$6 + 3$	
11.	$5 + 2$		26.	$3 + 6$	
12.	$5 + 3$		27.	$2 + 7$	
13.	$5 + 2$		28.	$3 + 7$	
14.	$5 + 3$		29.	$2 + 8$	
15.	$6 + 3$		30.	$3 + 6$	

Name: _____

Date: _____



Icahn Charter Schools

Grade: _____

30 kids were playing soccer and 7 kids were playing basketball. How many kids were playing sports?

Answer: _____

Write a number sentence that matches the work.

Write a number sentence that matches the story.

BNumber Correct: 

Name _____

Date _____

*Count on to add.

1.	$2 + 1$		16.	$4 + 3$	
2.	$1 + 1$		17.	$3 + 3$	
3.	$2 + 1$		18.	$2 + 3$	
4.	$2 + 2$		19.	$1 + 3$	
5.	$3 + 2$		20.	$0 + 3$	
6.	$2 + 2$		21.	$1 + 3$	
7.	$3 + 2$		22.	$2 + 5$	
8.	$3 + 1$		23.	$5 + 2$	
9.	$5 + 1$		24.	$2 + 6$	
10.	$6 + 1$		25.	$6 + 2$	
11.	$6 + 2$		26.	$3 + 6$	
12.	$5 + 2$		27.	$3 + 7$	
13.	$6 + 2$		28.	$2 + 7$	
14.	$6 + 3$		29.	$2 + 6$	
15.	$5 + 3$		30.	$3 + 6$	

Name: _____

Date: _____



Icahn Charter Schools

Grade: _____

Ms. Bernal has read 9 pages of her book. Her book is 18 pages long. How many more pages does Ms. Bernal need to read?


Answer: _____

Write a number sentence that matches the work.

Write a number sentence that matches the story.

B

Number Correct:



Name _____

Date _____

*Write the number that is 1 less.

1.	3		16.	10	
2.	2		17.	9	
3.	1		18.	11	
4.	6		19.	9	
5.	4		20.	13	
6.	2		21.	11	
7.	1		22.	1	
8.	3		23.	11	
9.	5		24.	21	
10.	7		25.	5	
11.	10		26.	15	
12.	9		27.	25	
13.	8		28.	20	
14.	6		29.	10	
15.	17		30.	21	

Name: _____

Date: _____



Icahn Charter Schools

Grade: _____

17 pink pens and 12 green pens were in the basket. How many pens were in the basket?

Answer: _____

Write a number sentence that matches the work.

Write a number sentence that matches the story.

Adding doubles

Grade 1 Addition Worksheet

Write the sum.

$8 + 8 = \square$

$2 + 2 = \square$

$9 + 9 = \square$

$1 + 1 = \square$

$4 + 4 = \square$

$5 + 5 = \square$

$9 + 9 = \square$

$0 + 0 = \square$

$7 + 7 = \square$

$7 + 7 = \square$

$6 + 6 = \square$

$4 + 4 = \square$

$5 + 5 = \square$

$3 + 3 = \square$

$2 + 2 = \square$

$6 + 6 = \square$

$1 + 1 = \square$

$0 + 0 = \square$

Name: _____

Date: _____



Icahn Charter Schools


Grade: _____

**There are 28 children on the playground. 12 are boys and the rest are girls.
How many girls are on the playground?**

Answer: _____

Write a number sentence that matches the work.

Write a number sentence that matches the story.



Name _____

Date _____

Do as many as you can in 90 seconds. Write the number of bonds you finished here:

1.		2.		3.		4.		5.	
6.		7.		8.		9.		10.	
11.		12.		13.		14.		15.	
16.		17.		18.		19.		20.	
21.		22.		23.		24.		25.	

number bond dash 10

Name: _____

Date: _____



Icahn Charter Schools

Grade: _____

15 books were on the library cart. Some books went missing. There are 8 books on the library cart. How many books went missing?

Answer: _____

Write a number sentence that matches the work.

Write a number sentence that matches the story.

Directions: Use your knowledge of partners to ten to solve the following addition and missing addend sentences.

1. $1+9=$ _____

12. $0+$ _____ $=10$

2. $3+7=$ _____

13. $5+$ _____ $=10$

3. $2+8=$ _____

14. $7+$ _____ $=10$

4. $9+1=$ _____

15. $6+$ _____ $=10$

5. $10+0=$ _____

16. $4+$ _____ $=10$

6. $4+6=$ _____

17. $8+$ _____ $=10$

7. $5+5=$ _____

18. $2+$ _____ $=10$

8. $7+3=$ _____

19. $3+$ _____ $=10$

9. $9+1=$ _____

20. $1+$ _____ $=10$

10. $8+2=$ _____

21. $9+$ _____ $=10$

11. $0+10=$ _____

22. $10+$ _____ $=1$

Name: _____

Date: _____



Icahn Charter Schools

Grade: _____

There were 16 students in Ms. Ferrer's class. Some students got sick and had to go home. Now there are 10 students in Ms. Ferrer's class. How many students went home sick?

Answer: _____

Write a number sentence that matches the work.

Write a number sentence that matches the story.

Directions: Use your knowledge of partners to ten to solve the following subtraction sentences.

1. $10-9=$ _____

12. $10-5=$ _____

2. $10-7=$ _____

13. $10-7=$ _____

3. $10-8=$ _____

14. $10-6=$ _____

4. $10-1=$ _____

15. $10-4=$ _____

5. $10-0=$ _____

16. $10-8=$ _____

6. $10-6=$ _____

17. $10-2=$ _____

7. $10-4=$ _____

18. $10-3=$ _____

8. $10-3=$ _____

19. $10-1=$ _____

9. $10-1=$ _____

20. $10-9=$ _____

10. $10-2=$ _____

21. $10-10=$ _____

11. $10-0=$ _____

22. $10-0=$ _____

Name: _____

Date: _____



Icahn Charter Schools

Grade: _____

Ms. Frazer has 9 dollars. She wants to buy sneakers for 25 dollars. How many more dollars does Ms. Frazer need buy the sneakers?

Answer: _____

Write a number sentence that matches the work.

Write a number sentence that matches the story.

Directions: Use your knowledge of doubles facts to solve the following subtraction sentences.

1. $2-1=$ _____

16. $2-1=$ _____

2. $20-10=$ _____

17. $12-6=$ _____

3. $10-5=$ _____

18. $4-2=$ _____

4. $4-2=$ _____

19. $8-4=$ _____

5. $12-6=$ _____

20. $6-3=$ _____

6. $6-3=$ _____

21. $14-7=$ _____

7. $8-4=$ _____

22. $16-8=$ _____

8. $4-2=$ _____

23. $20-10=$ _____

9. $14-7=$ _____

24. $2-1=$ _____

10. $8-4=$ _____

25. $6-3=$ _____

11. $16-8=$ _____

26. $14-7=$ _____

12. $18-9=$ _____

27. $20-10=$ _____

13. $20-10=$ _____

28. $4-2=$ _____

14. $6-3=$ _____

29. $10-5=$ _____

15. $10-5=$ _____

30. $12-6=$ _____

Name: _____

Date: _____



Icahn Charter Schools

Grade: _____

TJ the dog had 11 sticks. He then found 17 sticks in a field. How many sticks does TJ have now?

Answer: _____

Write a number sentence that matches the work.

Write a number sentence that matches the story.

Directions: Use doubles facts to solve the following addition sentences.

1. $1 + 1 =$ _____

2. $10 + 10 =$ _____

3. $5 + 5 =$ _____

4. $2 + 2 =$ _____

5. $6 + 6 =$ _____

6. $3 + 3 =$ _____

7. $4 + 4 =$ _____

8. $1 + 1 =$ _____

9. $3 + 3 =$ _____

10. $7 + 7 =$ _____

11. $10 + 10 =$ _____

12. $2 + 2 =$ _____

13. $5 + 5 =$ _____

14. $6 + 6 =$ _____

15. $2 + 2 =$ _____

16. $7 + 7 =$ _____

17. $4 + 4 =$ _____

18. $8 + 8 =$ _____

19. $9 + 9 =$ _____

20. $10 + 10 =$ _____

21. $3 + 3 =$ _____

22. $5 + 5 =$ _____

23. $1 + 1 =$ _____

24. $6 + 6 =$ _____

25. $2 + 2 =$ _____

26. $4 + 4 =$ _____

27. $3 + 3 =$ _____

28. $7 + 7 =$ _____

29. $8 + 8 =$ _____

30. $10 + 10 =$ _____

Name: _____

Date: _____



Icahn Charter Schools

Grade: _____

**There were 22 shirts in the drawer. 6 shirts were blue and some were white.
How many shirts were white?**

Answer: _____

Write a number sentence that matches the work.

Write a number sentence that matches the story.





















A

Name _____

Number Correct: 

Date _____

*Write the number that is 1 more.

1.			16.		
2.			17.	9	
3.			18.	7	
4.			19.		
5.			20.	8	
6.			21.	7	
7.			22.		
8.	5		23.		
9.			24.	10	
10.	6		25.		
11.			26.		
12.	7		27.		
13.			28.	9	
14.			29.		
15.	8		30.		

Number Chart from 1 to 100 (half-full)

Grade 1 Number Charts

Count by 1 from 1 to 100

1	2	3			6		8	9	10
			14	15	16	17	18		20
	22		24	25		27	28		
31	32	33		35	36	37			40
	42		44			47	48	49	50
				55		57	58		
		63		65		67	68		
				75			78	79	
		83					88	89	90
91	92		94			97	98	99	100

Name: _____

Date: _____



Icahn Charter Schools

Grade: _____

Ms. Vargas had 25 fruit snacks at snack. Ms. Valentzas had 7 fruit snacks. How many more fruit snacks did Ms. Vargas eat?

Answer: _____

Write a number sentence that matches the work.

Write a number sentence that matches the story.

Name: _____

Date: _____



Icahn Charter Schools

Grade: _____

32 kids were playing at the recess. 8 kids got tired and took a break. How many kids are playing at the recess now?

Answer: _____

Write a number sentence that matches the work.

Write a number sentence that matches the story.