









Kindergarten July Math Calendar!








<p>Hop on one foot. Count how many times you hopped. Challenge a friend.</p>	<p>Count to 50 by 1's and then by 10's.</p>	<p>I am a number that is larger than 3 and smaller than 7. What number could I be?</p>	<p>Which number is 3 more than 10?</p>	<p>Name the months of the year. What month is your birthday?</p> 
<p>How many different ways can you put 6 marbles in 2 bags? Draw pictures and write numbers to show.</p> 	<p>Name this shape and tell how you know what it is.</p> 	<p>Draw a picture of 5 dogs. How many legs are there altogether?</p> 	<p>What day is today? What day was yesterday? What day will tomorrow be?</p>	<p>Find 5 of your toys. Put them in order from smallest to biggest.</p>
<p>Find 5 things that are the square shaped and draw them.</p>	<p>Find 3 things that are the same length as your shoe. Draw them.</p> 	<p>Practice writing numbers 1-10. Try writing them again... neater this time.</p>	<p>Draw a picture of 6 birds. 2 more come. How many birds do you have now?</p>	<p>Count the number of spoons in the silverware drawer. Write the number. How much is 1 more?</p>
<p>What numbers are between 3 and 15?</p>	<p>Which day of the week comes before Saturday and after Thursday?</p>	<p>There are 3 brown cats and 2 white cats. How many cats are there in all?</p> 	<p>Daniel brought home 5 peaches. His brother ate 2 of them. How many are left? Draw a picture to show.</p>	<p>Draw and name 4 different shapes.</p>

Parent Signature: _____

Kindergarten August Math Calendar!



<p>Draw a picture of your family. How many hands are there?</p> 	<p>Trace your shoe. Find something that is longer and shorter.</p> 	<p>Draw 3 squares. Count the sides. How many did you count?</p>	<p>Mark has 6 baseballs. Mel has 4 baseballs. How many do they both have?</p> 	<p>Count the number of doors in your home. Count the number of windows. Which number is greater?</p>
<p>Collect 18 objects. How many groups of 10 can you make? How many are left over?</p>	<p>Find 5 things in your home that are rectangular shaped. Draw and label them.</p>	<p>Write and solve your own addition problem.</p>	<p>How many different way can you put 10 pennies in 2 cups? Draw pictures and write numbers to show.</p>	<p>Count to 100 by 10's and by 1's.</p>
<p>Practice writing numbers 1-20. Write them again...neater this time.</p>	<p>Count to 100 starting at 50</p>	<p>Emma has 4 bowls. She has 2 fish. How many more bowls than fish does she have? Draw to show how you know.</p> 	<p>Beth has 6 balloons. 3 of the balloons popped. How many balloons are left?</p> 	<p>You have 3 balls. How many more balls do you need to have 10 altogether?</p>
<p>Have an adult trace the numbers 1-10 on your back. Guess the numbers by feeling them.</p>	<p>Write and solve your own subtraction problem.</p>	<p>Write the name of everyone in your family. Who has the most letters in their name? Who has the least?</p>	<p>Count to 50, starting at 23.</p>	<p>Starting at 1, write numbers as high as you can go.</p>

Parent Signature: _____

